
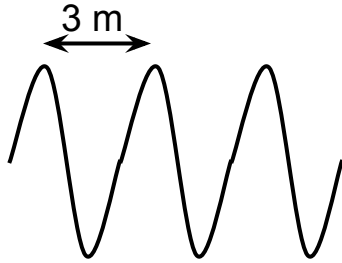


WAVE CALCULATIONS

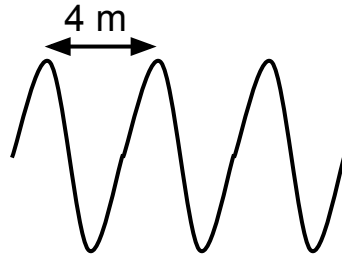


These waves have a speed of 18 metres per second.



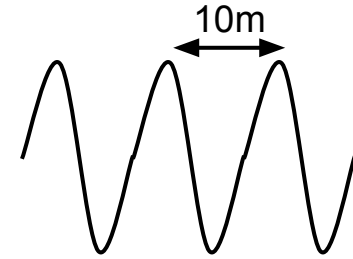
Calculate the frequency of the waves.

These waves have a frequency of 20 hertz.



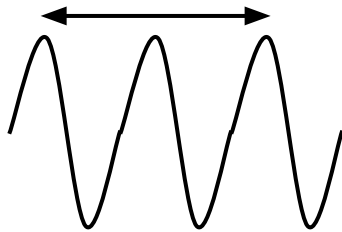
Calculate the wave speed

These waves have a frequency of 50 hertz



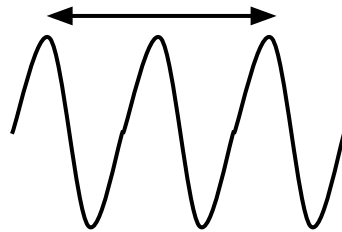
Calculate the wave speed

These waves have a speed of 20 metres per second and frequency 10 hertz.



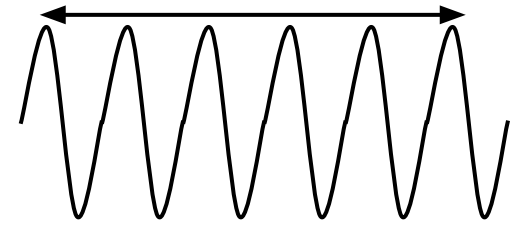
Calculate the length of the arrow

These waves have a speed of 12 metres per second and a frequency of 2 hertz.



Calculate the length of the arrow

These waves have a speed of 100 metres per second and a frequency of 20 hertz.



Calculate the length of the arrow